



## SSC MTS 22nd August 2019 Shift-3

All rights reserved. No part of this publication may be reproduced, distributed, or transmitted in any form or by any means, electronic, mechanical, photocopying, recording or otherwise, or stored in any retrieval system of any nature without the permission of cracku.in, application for which shall be made to [support@cracku.in](mailto:support@cracku.in)

**Instructions**

For the following questions answer them individually

**Question 1**

Select the most appropriate antonym of the word  
Yell

- A Shout
- B Whisper
- C Scream
- D Shriek

**Answer: B**

**SSC CHSL Previous Papers (DOWNLOAD PDF)**

**Question 2**

Identify the segment in the sentence which contains the grammatical error.  
Patralekha finished the cake in the blink of a eye.

- A of a eye
- B in the blink
- C Patralekha finished
- D the cake

**Answer: A**

**Question 3**

Select the most appropriate antonym of the word  
Reluctant

- A Hesitant
- B Uncertain
- C Unwilling
- D Eager

**Answer: D**

**Question 4**

Select the most appropriate word for the given group of words.  
One who does not express himself freely

- A Extrovert
- B Introvert
- C Narcissist

D Lunatic

Answer: B

## SSC Stenographer Previous Papers (Download PDF)

### Question 5

Select the most appropriate option to substitute the underlined segment in the given sentence. If there is no need to substitute it, select No improvement.

In a recession-hit economy, automobiles is the mostly affected sector.

A is the most

B are the mostly

C No improvement

D are the most

Answer: A

### Question 6

Select the most appropriate synonym of the given word

Drowsy

A Lively

B Alert

C Sleepy

D Active

Answer: C

### Question 7

Select the most appropriate word to fill in the blank and make a meaningful sentence.

The Middle-East job market has always been a \_\_\_\_\_ destination for Indians.

A lucrative

B luxury

C wealthy

D costly

Answer: A

## SSC GD Constable Previous Papers

### Question 8

Select the most appropriate synonym of the given word

Enormous

A Puny

- B Tiny
- C Huge
- D Petty



Answer: C

#### Question 9

Select the most appropriate meaning of the given idiom.

Be glad to see the back of

- A To avoid someone
- B To be happy when a person leaves
- C To be happy to receive guests
- D To support someone

Answer: B

#### Question 10

Select the most appropriate option to fill in the blank and make a grammatically correct sentence.

There is no information \_\_\_\_\_ the company's profit in the report.

- A about
- B along
- C among
- D with

Answer: A

## SSC MTS Previous Papers (DOWNLOAD PDF)

#### Question 11

Identify the segment in the sentence which contains the grammatical error.

Kaira has upset with me since the accident.

- A the accident
- B me since
- C upset with
- D Kaira has

Answer: D

#### Instructions

In the following passage some words have been deleted. Fill in the blanks with the help of the alternatives given. Select the most appropriate option for each blank.

#### Comprehension:

Steamships were first (1)\_\_\_\_\_ to the United States in 1807. By the 1830's dozens of steam vessels were in (2)\_\_\_\_\_. They offered the traveller (3)\_\_\_\_\_ transportation in comfortable facilities-a welcome (4)\_\_\_\_\_ to stagecoach travel, which at best could be described as

(5)\_\_\_\_\_.

**Question 12**

Select the most appropriate option to fill in blank No.1.

- A established
- B built
- C introduced
- D manufactured

**Answer: C**

**Question 13**

Select the most appropriate option to fill in blank No.2.

- A use
- B stand
- C move
- D transit

**Answer: A**

**SSC CGL Previous Papers (DOWNLOAD PDF)**

**Question 14**

Select the most appropriate option to fill in blank No.3.

- A light
- B slow
- C fast
- D leisurely

**Answer: C**

**Question 15**

Select the most appropriate option to fill in blank No.4.

- A sign
- B signal
- C gesture
- D alternative

**Answer: D**

**Question 16**

Select the most appropriate option to fill in blank No.5.

- A fortunate
- B wretched
- C admirable
- D worthy

**Answer: B**

## SSC CGL Free Mock Test (Latest Pattern)

### Instructions

For the following questions answer them individually

### Question 17

Select the most appropriate meaning of the given idiom.

**Once bitten, twice shy**

- A Someone who doesn't learn from his previous experiences
- B An unpleasant experience induces caution
- C Someone who is afraid of taking challenges
- D To keep something precious safely

**Answer: B**

### Question 18

Select the correctly spelt word.

- A Newclear
- B Nuclere
- C Neuclear
- D Nuclear

**Answer: D**

### Question 19

Select the most appropriate word for the given group of words.

**The study of stars and planets**

- A Archeology
- B Astrology
- C Anatomy
- D Astronomy

**Answer: D**

## SSC CHSL Free Mock Test (Latest Pattern)

**Question 20**

Select the correctly spelt word.

- A Hijean
- B Higiene
- C Hygene
- D Hygiene

Answer: D

**Question 21**

Select the most appropriate word to fill in the blank and make a meaningful sentence.

The method \_\_\_\_\_ by the teacher is very tedious.

- A regarded
- B reminded
- C allowed
- D suggested

Answer: D

**Question 22**

Select the most appropriate option to substitute the underlined segment in the given sentence. If there is no need to substitute it, select No improvement.

Every book is wrote by Ruskin Bond is a masterpiece.

- A written
- B has wrote
- C No improvement
- D have written

Answer: A

## SSC Stenographer Previous Papers (Latest Pattern)

**Question 23**

Select the most appropriate option to fill in the blank and make a grammatically correct sentence.

Planets do not have light \_\_\_\_\_ their own.

- A on
- B by
- C of
- D for

Answer: C

**Question 24**

Select the most appropriate option to substitute the underlined segment in the given sentence. If there is no need to substitute it, select No improvement.

It is not for nothing that Mumbai is talked about as the most cosmopolitan of Indian cities.

- A is talking
- B are talked
- C No improvement
- D was talking

**Answer: C**

**Question 25**

Identify the segment in the sentence which contains the grammatical error.

It is not possible to discuss anything with her because of her angry.

- A possible to discuss
- B anything with her
- C because of her angry
- D It is not

**Answer: C**

## SSC GD Constable Free Mock Test (Latest Pattern)

### Reasoning

**Instructions**

For the following questions answer them individually

**Question 26**

In a certain code language, 'FRAUD' is written as 'KWFZI'. What will be the code for 'GLAIR' in that code language?

- A KRHOX
- B KQGMX
- C LQFNW
- D LRHMX

**Answer: C**

## SSC MTS Free Mock Test (Latest Pattern)

**Question 27**

Select the option that is related to the third term in the same way as the second term is related to the first term.

LSX : NUZ :: GKQ : ?

- A IMS



- B JNP
- C JMS
- D INP

Answer: A

**Question 28**

In a certain code language, 'GIBECH' is written as '974356'. What will be the code for 'FHCIAD' in that code language?

- A 965726
- B 572803
- C 794125
- D 865732

Answer: D

**Question 29**

Pratik, Esha, Rashmi, Sakshi and Trisha are sitting on a bench facing North. Trisha & Esha are sitting together, Trisha & Rashmi are sitting together, Pratik is on the extreme left, Esha is second from extreme right. Who is sitting between Pratik & Esha?

- A Rashmi and Trisha
- B Rashmi and Sakshi
- C Esha and Trisha
- D Trisha and Sakshi

Answer: A

## SSC CPO Free Mock Test (Latest Pattern)

**Question 30**

Which two signs need to be interchanged to make the given equation correct?

$$16 + 27 \div 3 - 9 \times 12 = 85$$

- A +, ÷
- B -, ×
- C -, +
- D ×, ÷

Answer: B

**Question 31**

In a certain code language, 'BLANCH' is written as 'YIXKZE'. What will be the code for 'DEFAME' in that code language?

- A CDEJKL
- B BCDXJC

C ABCXJB

D ABDXIB

Answer: C

Question 32

Select the correct option that will complete the series

7.5, 4.7, 1.9, -0.9, \_\_\_\_

A -2.5

B -3.7

C -1.5

D -1.9

Answer: B

### SSC MTS Free Preparation App

Question 33

Select the option that is related to the third term in the same way as the second term is related to the first term.

Scientist : Laboratory :: Teacher : ?

A Students

B Knowledge


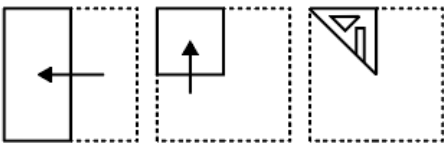
C Education

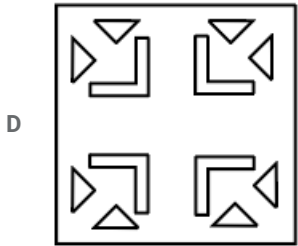
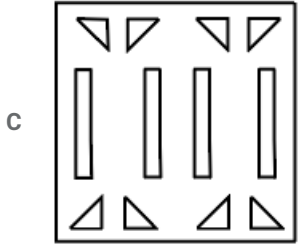

D School

Answer: D

Question 34

A piece of paper is folded and cut as shown below in the question figures. Select from the given answer figures, how it will appear when unfolded.

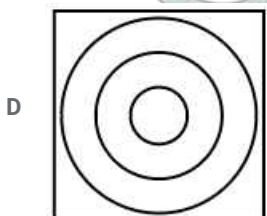
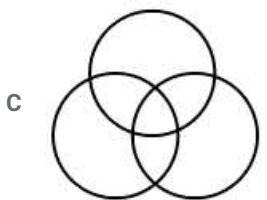
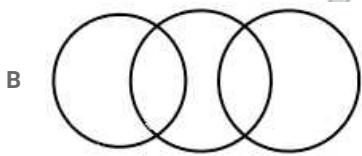
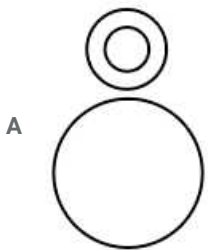




Answer: D

Question 35

Which of the following Venn diagrams best represents the relationship between Cars, Auto-rickshaws and Diesel vehicles?



Answer: B

285 SSC Mocks - Just RS. 249

Question 36

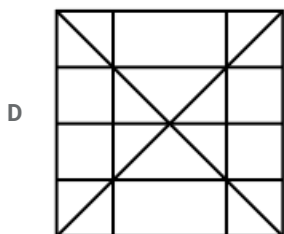
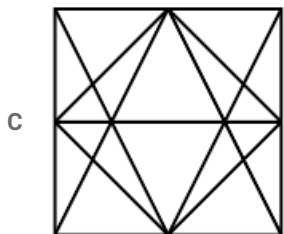
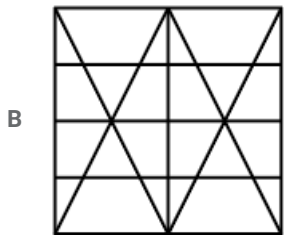
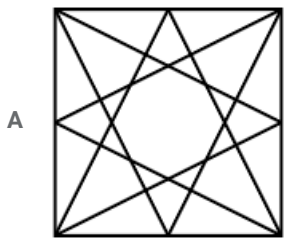
Select the option that is related to the third term in the same way as the second term is related to the first term.  
841 : 29 :: 484 : ?

- A 24
- B 22
- C 28
- D 32

Answer: B

Question 37

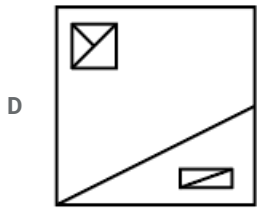
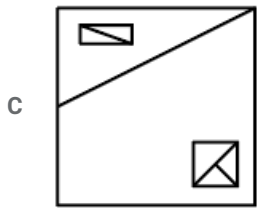
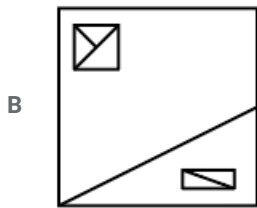
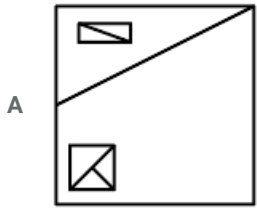
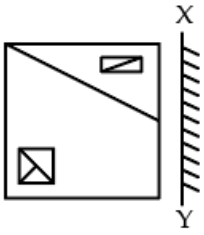
Select the option in which the given figure is embedded. (Rotation is not allowed)



Answer: B

Question 38

If a mirror is placed on the line XY, then which of the answer figures will be the right mirror image of the given figure?



Answer: C

SSC Exam Free Videos (Youtube)

Question 39

Usha, Damini, Amisha, Manju, Lalita and Harshita are sitting around a round table facing the centre. Usha is opposite Damini, who is to the right of Manju, Usha is between Amisha and Harshita, Harshita is not next to Manju. Who is to the right of Lalita?

- A Damini
- B Usha
- C Harshita
- D Manju

Answer: C

**Question 40**

In a certain code language, '15-78-25-36' is written as '28-154-48-70'. What will be the code for '23-63-42-81' in that code language?

- A 44-124-82-160
- B 125-511-152-982
- C 65-218-362-542
- D 46-126-84-164

**Answer: A**

**Question 41**

Five girls took part in a race. Rajni finished before Mahika but behind Garima. Ashmita finished before Sanchali but behind Mahika. Who came second in the race?

- A Sanchali
- B Mahika
- C Rajni
- D Garima

**Answer: C**

**SSC Study Material**

**Question 42**

Find the missing number from the below options.

3	5	7	71
9	2	1	29
6	4	11	?

- A 134
- B 143
- C 123
- D 132

**Answer: A**

**Question 43**

Which two numbers need to be interchanged to make the given equation correct?

$$72 \times 9 + 27 \div 3 - 6 = 213$$

- A 9, 6
- B 9, 3
- C 72, 27
- D 72, 6

Answer: B

Question 44

Select the correct option that will complete the series  
256, 384, 576, 864, \_\_\_\_

- A 1450
- B 1054
- C 1296
- D 1312

Answer: C

### SSC Daily Practice Set

Question 45

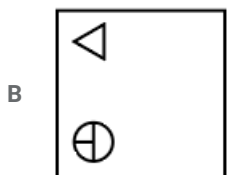
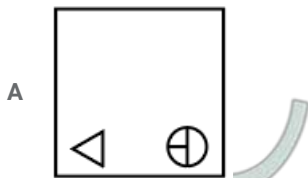
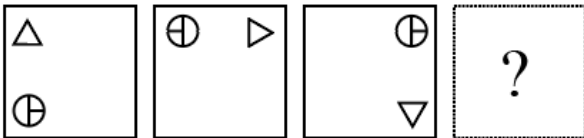
Select the option that is related to the third term in the same way as the second term is related to the first term.  
Moo : Cow :: neigh : ?

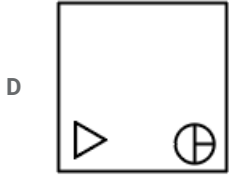
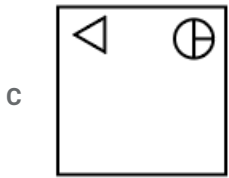
- A Owl
- B Wolf
- C Horse
- D Bear

Answer: C

Question 46

Which of the following answer figure completes the series of the question figure?





Answer: A

Question 47

Read the given statements and conclusions carefully. Assuming that the information given in the statements is true, even if it appears to be at variance with commonly known facts, decide which of the given conclusions logically follow(s) from the statements.

Statements:

All nieces are sisters.

Some nieces are brothers.

Conclusion:

I : Some brothers are sisters.

II : All sisters are nieces.

III : No brothers are sisters.

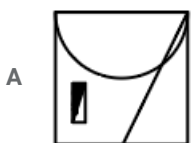
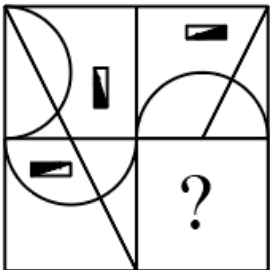
- A Only conclusion I and III follows
- B Only conclusion I follows
- C Only conclusion II follows
- D All conclusions I, II and III follow

Answer: B

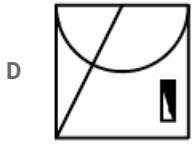
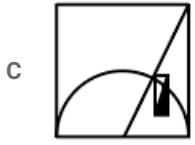
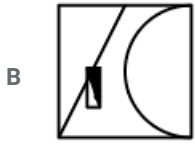
## SSC GK Free Tests

Question 48

Study the given pattern carefully and select the figure that will complete the pattern given in the question figure.







Answer: B

Question 49

Read the given statements and conclusions carefully. Assuming that the information given in the statements is true, even if it appears to be at variance with commonly known facts, decide which of the given conclusions logically follow(s) from the statements.

Statements:

Some cats are mice.

All mice are dogs.

Conclusion:

I: No dogs are cats.

II: All cats are dogs.

- A Only conclusion I follows
- B Both conclusions I and II follow
- C Only conclusion II follows
- D Neither conclusion I nor II follows

Answer: D

Question 50

Select the term that will come next in the following series.

HM, EJ, BG, \_\_\_\_

- A YD
- B SC
- C TE
- D YC

Answer: A

**SSC GK Questions**

**Quant**

**Instructions**

For the following questions answer them individually

Question 51

x is the greatest number by which, when 2460, 2633 and 2806 are divided, the remainder in each case is the same. What is the sum of digits of x?

- A 11
- B 10
- C 13
- D 9

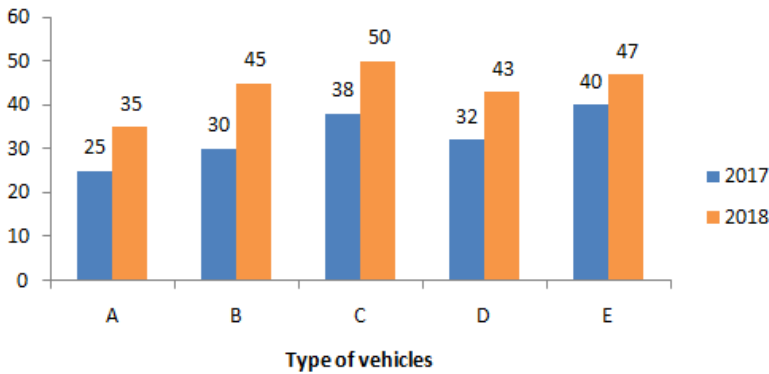
Answer: A

## Current Affairs Question and Answers (Download PDF)

Question 52

The given Bar Graph presents the number of different types of vehicles exported by a company in 2017 and 2018.

Different types of vehicles exported by a company in 2017 & 2018



The average export of vehicles in 2018 is what percent more than the export of vehicle A in 2017?

- A  $46\frac{2}{3}$
- B 68
- C  $37\frac{1}{2}$
- D 76

Answer: D

Question 53

If the compound interest in the third year at 8% p.a. on certain sum is ₹3600, then what is the difference between the compound interest in the 4<sup>th</sup> and 5<sup>th</sup> year? (nearest to an integer in ₹)

- A ₹304
- B ₹335
- C ₹288
- D ₹311

Answer: D

Question 54

If the simple interest on a sum of ₹ $x$  at 6 % p.a. for two years is double the simple interest on another sum of ₹ $y$  at 9% per annum for three years, then which of the following is true?

- A  $x = 2y$
- B  $x = 4.5y$
- C  $3x = 7y$
- D  $2x = 5y$

Answer: B

## Daily and Monthly Current Affairs (Download PDF)

Question 55

The average of 12 numbers is 18.5. The average of first six numbers is 16.8 and that of the last seven numbers is 17.4. If the 6<sup>th</sup> number is excluded, then what is the average (correct to one decimal place) of remaining 11 numbers?

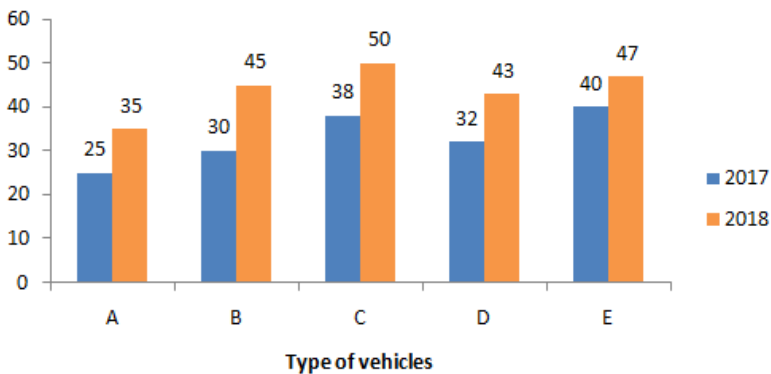
- A 17.9
- B 18.9
- C 18.4
- D 20.1

Answer: D

Question 56

The given Bar Graph presents the number of different types of vehicles exported by a company in 2017 and 2018.

**Different types of vehicles exported by a company in 2017 & 2018**



What is the ratio of the total number of vehicles exported in 2017 of types B, C and D to that of vehicles exported in 2018 of the types A, D and E?

- A 6 : 5
- B 7 : 10
- C 4 : 5
- D 18 : 25

Answer: C

**Question 57**

Amit bought an article for 2310 and sold it at a loss of 25%. With this money, he bought another article and sold it at a gain of 40%. What was his overall gain or loss percent?

- A Loss 2.5%
- B Gain 8%
- C Loss 4%
- D Gain 5%

**Answer: D**

**SSC CHSL Previous Papers (DOWNLOAD PDF)**

**Question 58**

To do a certain work, the ratio of efficiencies of A and B is 3 : 7, working together, they can complete a work in 14 days. B started the work and after working for 8 days, he left and A completed the remaining work. For how many days did A work?

- A 28
- B 30
- C 24
- D 27

**Answer: A**

**Question 59**

A and B can complete a certain work in 24 days and 42 days, respectively. A started the work and after x days, B joined him and the whole work was completed in 20 days. The value of x is:

- A 11
- B 13
- C 7
- D 9

**Answer: B**

**Question 60**

A boat goes a distance of 4 km upstream in 2 hours and the same distance downstream in 20 minutes. How long will it take to go 10<sup>1</sup>/<sub>2</sub> km in still water?

- A  $1\frac{1}{2}$  hours
- B 48 minutes
- C  $1\frac{1}{4}$  hours
- D 1 hour

**Answer: A**

## SSC Stenographer Previous Papers (Download PDF)

### Question 61

The marked price of an article is ₹882. It is sold for ₹806.40. If there is a loss of 4%, then by what percent above the cost was the article marked?

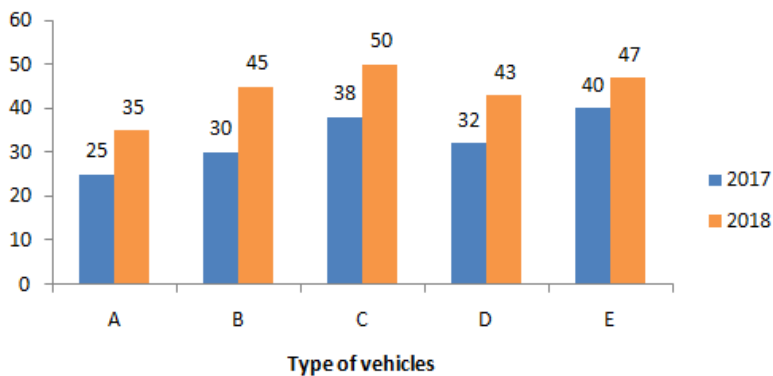
- A 8
- B 6
- C 4
- D 5

Answer: D

### Question 62

The given Bar Graph presents the number of different types of vehicles exported by a company in 2017 and 2018.

**Different types of vehicles exported by a company in 2017 & 2018**



The increase in the exports in 2018 as compared to that in 2017 is closest to 32 % in case of vehicles of type:

- A B
- B A
- C C
- D D

Answer: C

### Question 63

The diameter of the base of a right circular cone is 10 cm and its height is 12 cm. What is the total surface area (in  $\text{cm}^2$ ) of the cone?

- A  $90\pi$
- B  $70\pi$
- C  $84\pi$
- D  $65\pi$

Answer: A

## SSC GD Constable Previous Papers

### Question 64

A car travels for 6 hours at different speeds. For the first two hours at 60 m/s, for the next 2 hours at 50 m/s and for the remaining time at  $x$  m/s. If the average speed for the entire journey is 52 m/s, what is the value of  $x$ ?

- A 46
- B  $44\frac{1}{2}$
- C 48
- D  $45\frac{1}{2}$

Answer: A

### Question 65

If  $(x + 10)\%$  of 200 is  $33\frac{1}{3}\%$  more than  $x\%$  of 180, then 10% of  $(x + 20)$  is what percent less than 40% of  $x$ ?

- A 55
- B 60
- C 70
- D 65

Answer: D

### Question 66

A sum of ₹3200 was to be divided between A, B, C and D in the ratio 4 : 6 : 7 : 3. But by mistake, it was divided in the ratio 3 : 5 : 6 : 2. As a result, who got  $16\frac{2}{3}\%$  less than her due?

- A C
- B A
- C B
- D D

Answer: D

## SSC MTS Previous Papers (DOWNLOAD PDF)

### Question 67

The areas of three adjacent faces of a cuboid are  $18 \text{ cm}^2$ ,  $20 \text{ cm}^2$  and  $40 \text{ cm}^2$ . What is the volume (in  $\text{cm}^3$ ) of the cuboid?

- A 144
- B 100
- C 120
- D 125

Answer: C

Question 68

There are 96 students in a class, out of which the number of girls is 40% more than that of the boys. The average score in mathematics of the boys is 40% more than the average score of girls. If the average score in mathematics of all the students is 63, then what is the average score of the girls in mathematics?

- A 51
- B 54
- C 55
- D 57

Answer: B

Question 69

A person sold an article at a loss of 12%. Had he sold it for ₹162 more, he would have gained 24%. If the article is sold for ₹360 then loss percent is:

- A 18
- B 20
- C 25
- D 15

Answer: B

**SSC CGL Previous Papers (DOWNLOAD PDF)**

Question 70

What is the sum of median and mode of the data

8, 1, 5, 4, 9, 6, 3, 6, 1, 3, 6, 9, 1, 7, 2, 6, 5?

- A 13
- B 11
- C 12
- D 14

Answer: B

Question 71

The ratio of ages of A and B, four years ago, was 7 : 5. The ratio of their ages, 6 years from now, will be 19 : 15. What is the ratio of the present ages of A and B?

- A 2 : 1
- B 5 : 2
- C 4 : 3
- D 3 : 2

Answer: C

Question 72

The value of  $\frac{5+2 \text{ of } 3 \div 3 \text{ of } 2 \times 3}{9+72 \div 3-2 \times (3-2)-3}$  is  $\frac{a}{b}$ , where  $a$  and  $b$  are prime numbers. The value of  $(b - a)$  is:

A 7

B 3

C 5

D 4

Answer: C

### SSC CGL Free Mock Test (Latest Pattern)

Question 73

A wire encloses an area of  $616 \text{ cm}^2$  when it is bent in the form of a circle. If the wire is bent in the form of a square, then its area (in  $\text{cm}^2$ ) is very nearly equal to: (Take  $\pi = \frac{22}{7}$ )

A 400

B 576

C 441

D 484

Answer: D

Question 74

What is the ratio of the mean proportional between 4.5 and 0.5, and the third proportional to 4.5 and 9.0?

A 3 : 8

B 2 : 9

C 1 : 6

D 1 : 12

Answer: D

Question 75

The value of  $(54 \div 7 \text{ of } \frac{1}{2}) \times (54 \times 7 \div \frac{1}{2}) \div (54 \div 7 \times \frac{1}{2})$  is

A  $\frac{9}{8}$

B  $\frac{1}{18}$

C 18

D  $\frac{8}{9}$



Answer: C

## SSC CHSL Free Mock Test (Latest Pattern)

### General knowledge

#### Instructions

For the following questions answer them individually

#### Question 76

Who appoints Judges of Supreme Court and High Court in India?

- A Chief Justice of India
- B President
- C Prime Minister
- D Law Minister

Answer: B

## SSC Stenographer Previous Papers (Latest Pattern)

#### Question 77

Current Account of Balance of payments does NOT include which of the following?

- A Investments
- B Transfer Payments
- C Trade in Goods
- D Trade in Services

Answer: A

#### Question 78

Jallikattu-Bull fight takes place in \_\_\_\_\_.

- A Maharashtra
- B Kerala
- C Tamil Nadu
- D Andhra Pradesh

Answer: C

#### Question 79

Which plant tissue is responsible for transport of water and minerals from roots to the leaves ?

- A Phloem
- B Xylem

C Stomata

D Pith

Answer: B

## SSC GD Constable Free Mock Test (Latest Pattern)

Question 80

The Kaveri river basin falls in how many states of India?

A 2

B 5

C 4

D 3

Answer: D

Question 81

Lomas Rishi Cave, constructed for Buddhist monks is located in which state?

A Madhya Pradesh

B Chhattisgarh

C Jharkhand

D Bihar

Answer: D

Question 82

Battle of Plassey was fought between \_\_\_\_\_.

A Alivardi Khan and British Army

B Sirajuddaulah and British Army

C Mir Qasim and British Army

D Marathas and British Army

Answer: B

## SSC MTS Free Mock Test (Latest Pattern)

Question 83

Which of the following sportsperson is NOT associated to Hockey?

A Harmanpreet Kaur

B P. A. Raphael

C Sardar Singh

D S. V. Sunil

Answer: A

**Question 84**

Who among the following has been selected for the Vyas Samman 2018 award by the KK Birla Foundation ?

A Leeladhar Jagudi

B Mohan Rana

C Ashok Vajpayi

D Kunwar Narayan

Answer: A

**Question 85**

Which of the following is NOT a Cricket tournament ?

A Indian Premier League

B Syed Mushtaq Ali Trophy

C Indian Super League

D Vijaya Hazare Trophy

Answer: C

## SSC CPO Free Mock Test (Latest Pattern)

**Question 86**

Natyanjali Dance Festival pays tribute to which deity?

A Lord Brahma

B Lord Vishnu

C Lord Ganesh

D Lord Shiva

Answer: D

**Question 87**

Which Book won Golden Man Booker Prize 2018?

A Five Point Someone

B Sacred Hunger

C The English Patient

D Moon Tiger

Answer: C

Question 88

Noble gases belong to which of the following groups of the periodic table?

- A 16
- B 18
- C 13
- D 15

Answer: B

**SSC MTS Free Preparation App**

Question 89

At which temperature are Fahrenheit and Celsius equal?

- A -30
- B -40
- C -10
- D -20

Answer: B

Question 90

Military Commanders during the Rule of Akbar were known as \_\_\_\_\_.

- A Kotwal
- B Faujdars
- C Bakhshi
- D Sadr

Answer: B

Question 91

What is the reason behind food chains generally having 3-4 Trophic Levels?

- A Decreasing Organisms at each level
- B Increasing Number of Organism at each level
- C Decreasing Energy at each level
- D Similar Energy at each level

Answer: C

**285 SSC Mocks - Just RS. 249**

**Question 92**

The President of India has same powers and functions as \_\_\_\_\_.

- A President of USA
- B President of China
- C President Of Turkey
- D Queen of Britain

**Answer: D**

**Question 93**

Which of the following newspaper was NOT launched by Lala Lajpat Rai?

- A The People
- B Young India
- C Regenerator of Aryavarta
- D The Panjabee

**Answer: B**

**Question 94**

Who among the following does NOT take part in the election of the President of India?

- A Elected Member of State Assembly
- B Elected Member of Lok Sabha
- C Elected Member of Rajya Sabha
- D Nominated Member of Parliament

**Answer: D**

**SSC Exam Free Videos (Youtube)**

**Question 95**

\_\_\_\_\_ carries oxygenated blood from lungs to heart.

- A Aorta
- B Renal artery
- C Pulmonary veins
- D Vena Cava

**Answer: C**

**Explanation:**

Pulmonary circulation refers to the circulation of **blood** in which deoxygenated **blood** is pumped from the **heart** to the **lungs** and **oxygenated blood** is returned to back to the **heart**.

The pulmonary veins carry oxygenated blood from the lungs to the **left atrium** of the heart.

**Question 96**

**Which of the following relations is true?**

- A  $GNP \equiv GDP \times \text{Net factor income from abroad}$
- B  $GNP \equiv GDP - \text{Net factor income from abroad}$
- C  $GNP \equiv GDP + \text{Net factor income from abroad}$
- D  $GNP \equiv GDP / \text{Net factor income from abroad}$

**Answer: C**

**Question 97**

**Black Soil is NOT found in which State of India?**

- A Madhya Pradesh
- B Punjab
- C Andhra Pradesh
- D Maharashtra

**Answer: B**

**SSC Study Material**

**Question 98**

**Under which Governor General did Britishers adopt "Policy of Paramountcy"?**

- A Lord Dalhousie
- B Lord Clive
- C Lord Cornwallis
- D Lord Hastings

**Answer: D**

**Question 99**

**The difference between the value of exports and value of imports of goods of a country in a given period of time is known as \_\_\_\_.**

- A Balance of Trade
- B Balance of payment
- C Balance of currency
- D Balance of invisibles

**Answer: A**

**Question 100**

**Which hills are located at the junction of Eastern and Western Ghats?**

- A Nilgiri
- B Palconda
- C Satpura
- D Vindhyas

Answer: A

**SSC Daily Practice Set**

**SSC CHSL Previous Papers (DOWNLOAD PDF)**

**SSC Stenographer Previous Papers (Download PDF)**

**SSC GD Constable Previous Papers**

**SSC MTS Previous Papers (DOWNLOAD PDF)**

**SSC CGL Previous Papers (DOWNLOAD PDF)**

**SSC CGL Free Mock Test (Latest Pattern)**

**SSC CHSL Free Mock Test (Latest Pattern)**

**SSC Stenographer Previous Papers (Latest Pattern)**

**SSC GD Constable Free Mock Test (Latest Pattern)**

**SSC MTS Free Mock Test (Latest Pattern)**

**SSC CPO Free Mock Test (Latest Pattern)**

**SSC MTS Free Preparation App**

**285 SSC Mocks - Just RS. 249**

**SSC Exam Free Videos (Youtube)**

**SSC Study Material**



**SSC Daily Practice Set**

**SSC GK Free Tests**

**SSC GK Questions**

**Current Affairs Question and Answers (Download PDF)**

**Daily and Monthly Current Affairs (Download PDF)**